

--

--	--	--	--	--

--	--	--	--

0444/23

October/November 2017

1 hour 30 minutes

Additional Materials: Geometrical instruments

READ THESE INSTRUCTIONS FIRST

DO **NOT** WRITE IN ANY BARCODES.

If work is needed for any question it must be shown in the space provided.

The total of the points for this paper is 70.

This document consists of **12** printed pages.

Formula List

For the equation

$$ax^2 + bx + c = 0$$

$$x = \frac{-b \pm \sqrt{b^2 - 4ac}}{2a}$$

Lateral surface area, A , of cylinder of radius r , height h .

$$A = 2\pi rh$$

Lateral surface area, A , of cone of radius r , sloping edge l .

$$A = \pi rl$$

Surface area, A , of sphere of radius r :

$$A = 4\pi r^2$$

Volume, V , of pyramid, base area A , height h .

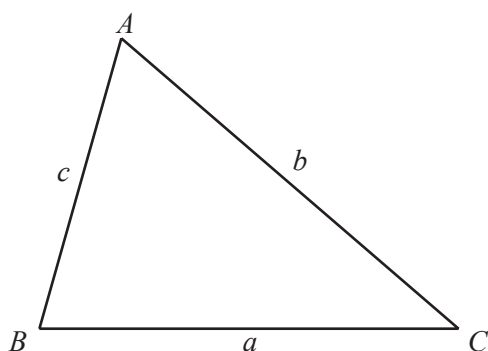
$$V = \frac{1}{3}Ah$$

Volume, V , of cone of radius r , height h .

$$V = \frac{1}{3}\pi r^2 h$$

Volume, V , of sphere of radius r .

$$V = \frac{4}{3}\pi r^3$$



$$\frac{a}{\sin A} = \frac{b}{\sin B} = \frac{c}{\sin C}$$

$$a^2 = b^2 + c^2 - 2bc \cos A$$

$$\text{Area} = \frac{1}{2}bc \sin A$$

- 1 Ahmed drives his car from London to Cambridge.
He leaves London at 07 45 and arrives in Cambridge at 10 17.

Work out the time, in hours and minutes, that he takes to drive from London to Cambridge.

..... h min [1]

- 2 Work out. $\sqrt{2^3 + 1}$

..... [1]

- 3 Write \$4 as a percentage of \$80.

..... % [1]

- 4 A quadrilateral has one line of symmetry and no rotational symmetry.

Write down the name of this quadrilateral.

..... [1]

- 5 Factor completely. $18x + 27y$

..... [1]

6 $(\sqrt[3]{10})^2 = 10^p$

Find the value of p .

$p = \dots\dots\dots$ [1]

7 The bearing of Q from P is 055° .

Find the bearing of P from Q .

$\dots\dots\dots$ [2]

8 Work out $3.6 \times 10^8 + 5.4 \times 10^9$.
Give your answer in scientific notation.

$\dots\dots\dots$ [2]

9 Solve the inequality.
 $7 - 8x \geq 19 + 2x$

$\dots\dots\dots$ [2]

- 10** A model of a house is made using a scale of 1 : 30.
The model has a surface area of 6000 cm^2 .

Work out the surface area of the actual house.
Give your answer in square meters.

..... m^2 [3]

- 11** Work out the size of one interior angle of a regular 12-sided polygon.

..... [3]

- 12** Solve the system of linear equations.

$$\begin{aligned} 3x + y &= 7 \\ 2x - 3y &= 12 \end{aligned}$$

$x =$

$y =$ [3]

- 13** Work out $3\frac{1}{7} - 1\frac{1}{4}$.
Give your answer as a mixed number in its lowest terms.

..... [3]

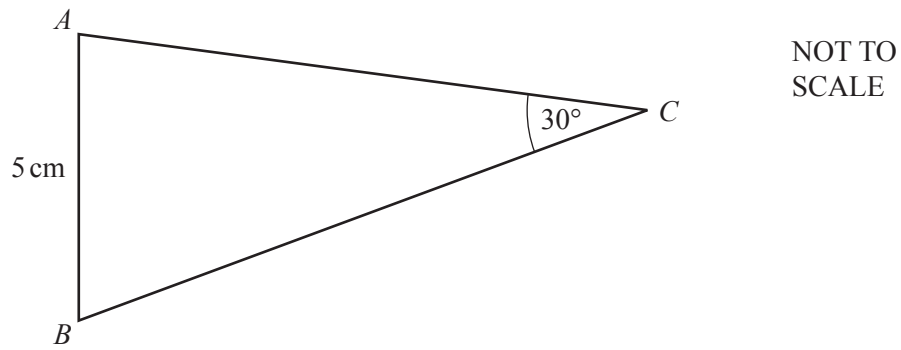
- 14** Solve by factoring.
 $3x^2 - 7x - 20 = 0$

$x = \dots\dots\dots$ or $x = \dots\dots\dots$ [3]

- 15** Simplify $(3 + \sqrt{5})^2 + \sqrt{20}$.

..... [3]

16



$$\sin A = 0.8.$$

Work out the length of BC .

$$BC = \dots\dots\dots \text{ cm [3]}$$

17 Solve for x .

$$3m + xy = \frac{xp}{4}$$

$$x = \dots\dots\dots [4]$$

- 18 (a) The n th term of a sequence is $6 - 5n$.

Write down the first three terms of this sequence.

.....,, [1]

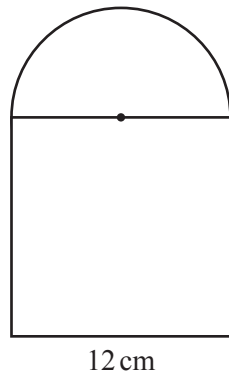
- (b) The n th term of another sequence is $5n^2 + 3$.

Is 608 a term in this sequence?

Explain how you decide.

..... because [3]

19



NOT TO
SCALE

The diagram shows a shape made from a square and a semi-circle.

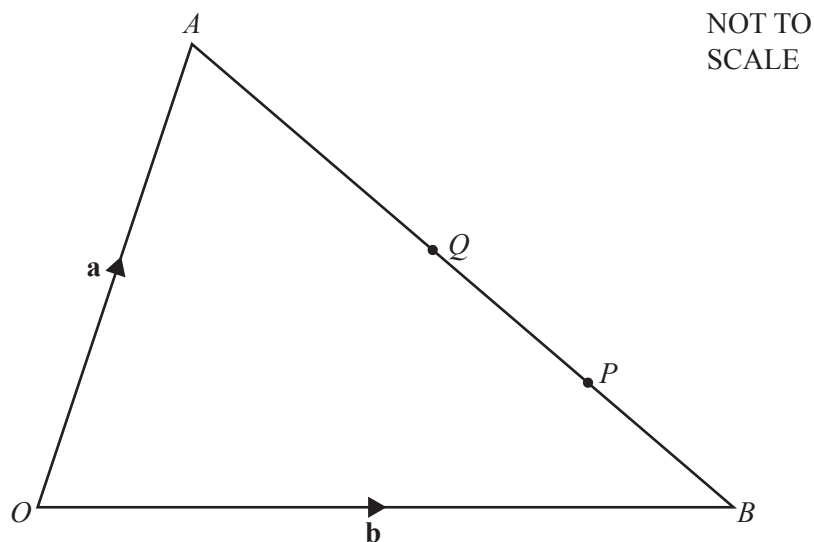
The total area of the shape is $k\pi + c$ square centimeters.

Find the value of k and the value of c .

$k =$

$c =$ [4]

20



In the diagram, $AQ = QB$ and $QP = PB$.
 $\vec{OA} = \mathbf{a}$ and $\vec{OB} = \mathbf{b}$.

- (a) Find the following in terms of \mathbf{a} and \mathbf{b} .
 Give your answers in their simplest form.

(i) \vec{AB}

..... [1]

(ii) \vec{QP}

..... [1]

- (iii) The position vector of P .

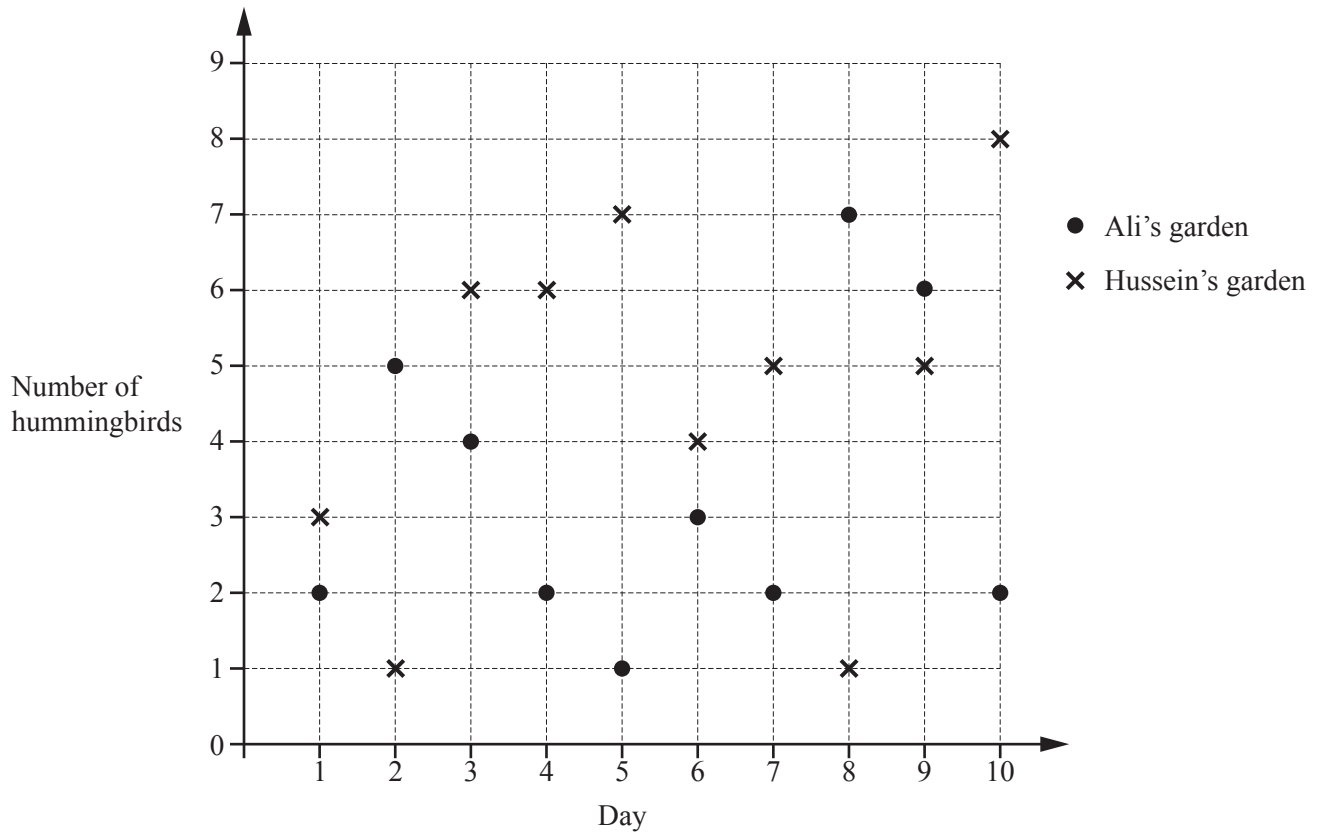
..... [2]

- (b) $OBTQ$ is a parallelogram.

Find \vec{AT} in terms of \mathbf{a} and \mathbf{b} .
 Give your answer in its simplest form.

..... [2]

- 21 The diagram shows the numbers of hummingbirds seen by Ali and Hussein in their gardens each day for 10 days.



- (a) Work out the mean number of hummingbirds seen in Ali's garden each day.

..... [3]

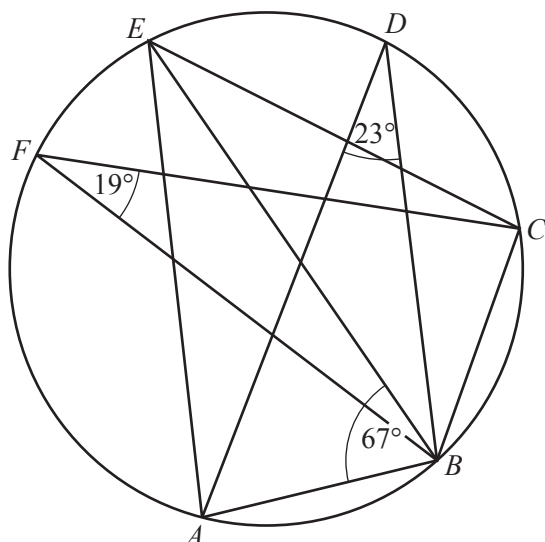
- (b) Work out the median number of hummingbirds seen in Hussein's garden each day.

..... [2]

- (c) On one of these days there were 4 times as many hummingbirds seen in Hussein's garden as in Ali's garden.

Which day was this?

Day [1]



NOT TO
SCALE

In the diagram, points A , B , C , D , E and F lie on the circumference of the circle.
Angle $BFC = 19^\circ$, angle $ADB = 23^\circ$ and angle $ABE = 67^\circ$.

Work out

(a) angle BEC ,

Angle $BEC = \dots\dots\dots [1]$

(b) angle ABC ,

Angle $ABC = \dots\dots\dots [3]$

(c) angle BCE .

Angle $BCE = \dots\dots\dots [2]$

Question 23 is printed on the next page.

- 23 (a) Write down a cube number that is greater than 100 and less than 1000.

..... [1]

- (b) Write down a prime number between 90 and 100.

..... [1]

- (c) Write the following in order of size, starting with the smallest.

0.71

7%

$\frac{7}{10}$

$\sqrt{49}$

..... < < < [3]
smallest

- (d) Find the value of $\left(\frac{27}{8}\right)^{-\frac{2}{3}}$.

..... [2]

Permission to reproduce items where third-party owned material protected by copyright is included has been sought and cleared where possible. Every reasonable effort has been made by the publisher (UCLES) to trace copyright holders, but if any items requiring clearance have unwittingly been included, the publisher will be pleased to make amends at the earliest possible opportunity.

To avoid the issue of disclosure of answer-related information to candidates, all copyright acknowledgements are reproduced online in the Cambridge International Examinations Copyright Acknowledgements Booklet. This is produced for each series of examinations and is freely available to download at www.cie.org.uk after the live examination series.

Cambridge International Examinations is part of the Cambridge Assessment Group. Cambridge Assessment is the brand name of University of Cambridge Local Examinations Syndicate (UCLES), which is itself a department of the University of Cambridge.